

Maths Home Learning Red Group Week 3 and 4

Arithmetic

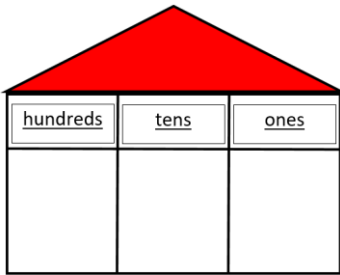
Practise your number formation from 1 to 10. Write your numbers in sand, use a paintbrush and water to paint them on your driveway, path, patio or house wall, use chalks to write them outside. Remember to make sure your numbers are the right way around. Take some photos to show us your work.

0 1 2 3 4 5 6 7 8 9 10

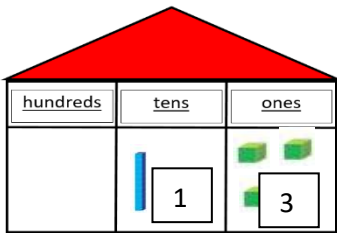
How did I do?



Place Value

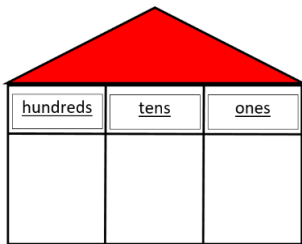
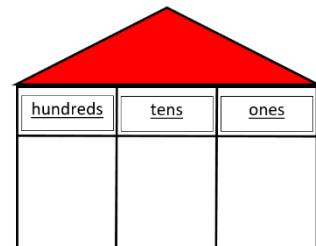


Can you say how many tens and how many ones there are in a number? Remember our place value houses? Remember our tens rods and our ones cubes? Can you use these to help you? You can draw tens by drawing a straight line and ones by drawing small squares.



E.g. 13 has 1 ten and 3 ones.

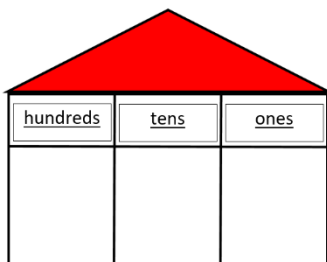
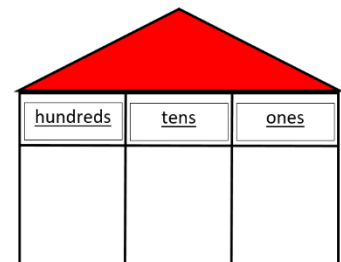
1) 12 has tens and ones



2) 21 has tens and ones



3) 18 has tens and ones



4) 23 has tens and ones

How did I do?

Addition

$7 + 3 =$



$5 + 4 =$



$8 + 5 =$



$12 + 3 =$



Mrs Land has 7 balls and Mrs Bloomer has 6 balls. How many balls do they have altogether?



How did I do?



Subtraction

$7 - 3 =$



$9 - 4 =$



$12 - 5 =$



$15 - 3 =$



Mrs Land has 6p she buys a chocolate for 3p. How much money does she have left?



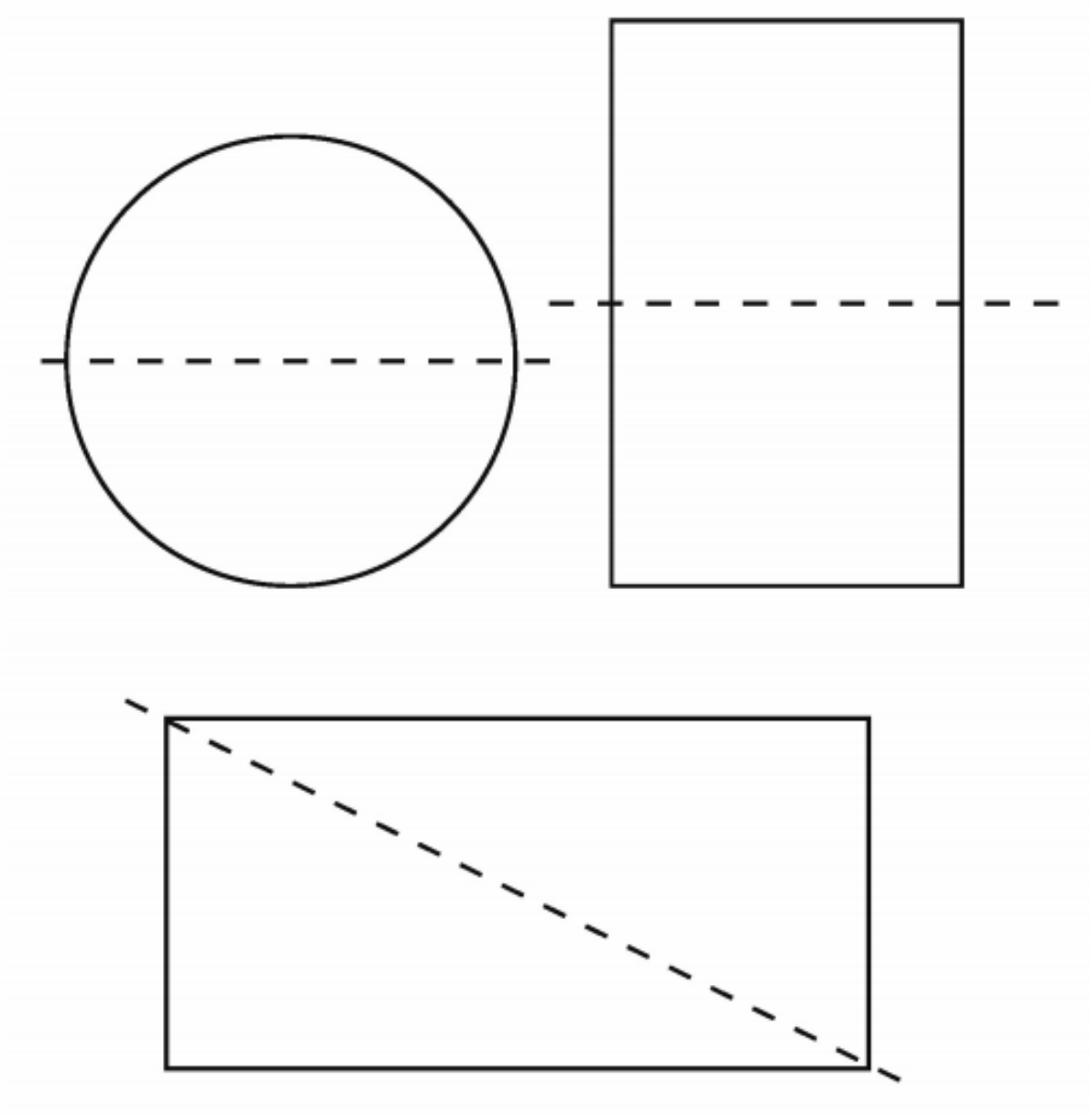
How did I do?






Fractions

Can you colour $\frac{1}{2}$ of each shape red and $\frac{1}{2}$ of each shape green? (if you do not have green or red colours, colour $\frac{1}{2}$ of the shape one colour and $\frac{1}{2}$ of the shape another colour.

How much of each shape have you coloured in?




How did I do?

Shape




Cut out the puzzle pieces and glue them together to make a circle, rectangle, triangle and square. Remember to write the name on your shape.

How did I do?



Measurement

With the help of an adult, investigate what moves in your house and record your findings by drawing or writing in the table below.

<p>up and down</p> 	
<p>forwards and backwards</p> 	
<p>round and round</p> 	

How did I do?



Time

Draw a line to match the clock with its time.



two o'clock



nine o'clock



one o'clock



four o'clock

How did I do?



Money

Cut out the coins and stick them in the right place.

1p	
2p	
5p	
10p	
20p	
50p	
£1	
£2	

How did I do?



Length and Height

Find five objects and order them according to their size. Take a photo and stick it below.

How did I do?

